



British Columbia
Conservatory of Music

Grade 6

Theory

Examination

May 2022

Candidate Number: _____


Mark: _____ / 100




10

1. Write the following scales using **WHOLE** notes.


a) **D flat major**, ascending and descending, using a key signature and mark the semitones with a slur.




b) **E minor harmonic form**, ascending and descending, using a key signature.



c) **F minor melodic form**, descending only, using accidentals instead of a key signature.




d) **G minor natural form**, ascending and descending, using accidentals instead of a key signature.




2. Name the key of the following melody.
Transpose it *up* into **B minor**.

10

Moderato



Key: _____



New Key: _____ Name the interval of the transposition: _____

3. Write the following chords in root position, using a key signature:

10

- a) the **submediant triad** of **D major** in first inversion.
- b) the **supertonic triad** of **E flat minor** in second inversion.
- c) the **mediant triad** of **G flat major** in root position.
- d) the **leading note triad** of **E major** in first inversion.
- e) the **dominant triad** of **B minor** in second inversion; based on the harmonic form of the

a) b) c) d) e)

10

4. a) Write the following intervals above the given notes.

perfect 4
minor 3
augmented 6
major 2
diminished 7

b) Name the following melodic intervals.

10

5. For the following melody composition question:


- a) Name the key
- b) Complete the first period (phrase) according to the **functional chords symbols** and end on an unstable note.
- c) Compose a **parallel period** (phrase) and show the **functional chords symbols** used and end on a stable note.
- d) Draw the appropriate phrase marks.

Key: _____

6. The following are all **Dominant triads** and the keys have been given:

10

- i) add the correct **key signature** and any necessary accidentals, based on the **harmonic** form of the scale.
- ii) name the **position** of each chord.

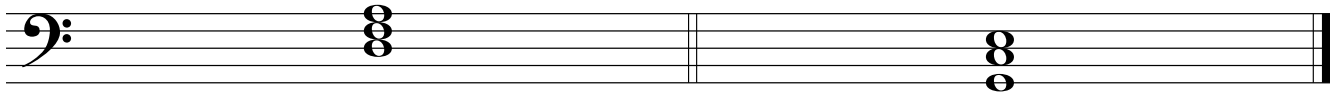


Key: C# minor

D minor

B^b minor

Position: _____



Key: G minor


F minor

Position: _____

10

7. For each of the following, name the **key** and the **cadence**.

Identify the chords using **functional chord symbols** for all cadences.




Key: _____ V i

Cadence




Key: _____

Cadence



Key: _____

Cadence



Key: _____

Cadence

8. Match ALL of the terms in the left column with the English definition in the right column by placing the correct alphabet letter-name in the space provided.

10

- | | | | |
|----|----------------------------|-------|--------------------------------------|
| a) | <i>mano sinistra, M.S.</i> | _____ | vary the speed, not in strict time |
| b) | <i>largo</i> | _____ | suddenly |
| c) | <i>cantabile</i> | _____ | return to the original tempo |
| d) | <i>larghetto</i> | _____ | slow, solemn and sober |
| e) | <i>a tempo</i> | _____ | fairly slow but not as slow as largo |
| f) | <i>accelerando</i> | _____ | right hand |
| g) | <i>rubato</i> | _____ | at a moderate speed |
| h) | <i>molto</i> | _____ | loud, then immediately soft |
| i) | <i>moderato</i> | _____ | accelerate, speed up |
| j) | <i>senza</i> | _____ | in a singing style |
| k) | <i>fortepiano</i> | _____ | decreasing in speed and volume |
| l) | <i>poco a poco</i> | _____ | always |
| m) | <i>mano destra, M.D.</i> | _____ | in a graceful, elegant style |
| n) | <i>grave</i> | _____ | without |
| o) | <i>sempre</i> | _____ | left hand |
| p) | <i>andantino</i> | _____ | little by little |
| q) | <i>ritardando</i> | _____ | very much, a great deal |
| r) | <i>morendo</i> | _____ | gradually slower |
| s) | <i>grazioso</i> | _____ | very slow and stately |
| t) | <i>subito</i> | _____ | a little faster than andante |

9a. Add rests in the places indicated by brackets to complete each of the following measures.

10

9b. Add the correct **time signature** to each of the following:

10. Analyze this composition by answering the following questions.
Use the spaces provided below.

ROMPING AND STOMPING

Allegro ♩ = 104

A. B. Anonymous

C. D. E.

- Name the key of this composition. _____
- Write the *time signature* directly on the music.
- How many beats per minute are indicated for this piece? _____
- How many *measures* are in this piece? _____
- Which note of the scale is missing from this composition? _____
- Identify the *root*: _____ and the *position*: _____ of the chord in box **A**.
- What does the *curved line* in box **B** indicate? _____
- What do the *dots* in box **C** indicate? _____
- Identify the interval in the box at letter **D**. _____
- What do the dots and double bar line at letter **E** indicate? _____

ROUGH WORK

